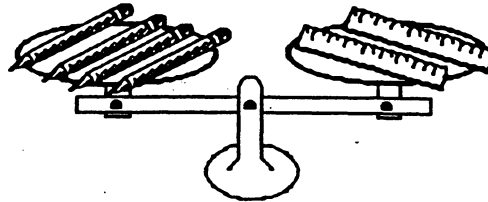


SUNSHINE MATH - 2
Earth, XXIII

Name: _____

(This shows my own thinking.)

- ★★ 1. Which weighs more, a pencil or a ruler?




Answer: _____

- ★★ 2. A school lunch costs Tanya \$1.25. About how much does she pay to eat at school for a whole week? Circle the best answer.

\$3 \$5 \$4 \$6

- ★ 3. A famous military building in Washington, D.C. is called the Pentagon because of its shape. On the 4th of July a flag is flown on each side of the building. How many flags are needed?



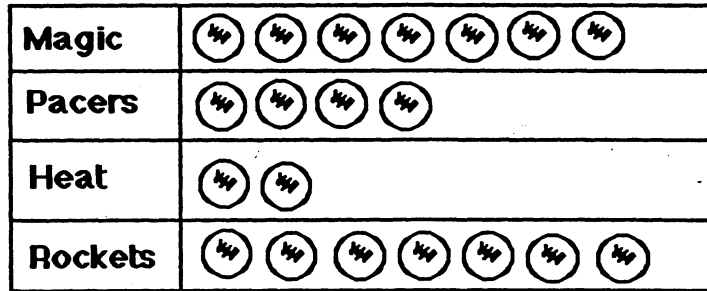
Answer : _____ flags

- ★ 4. Parker has 26 golf balls. She gives Bryan 19 golf balls. How many golf balls does Parker have left?

Answer: _____ golf balls

- ★★★★ 5. Look at the graph of 20 games played. Answer the three questions below the graph.

Basketball Games Won



Key: ⊙ means 1 win

- A. How many more games did the Magic win than the Heat? _____ more games
- B. Which team won exactly 2 games more than another team? _____

- C. Fill in the chart so that each team has the same number of wins for those 20 games.

Basketball Games Won

Magic	
Pacers	
Heat	
Rockets	

- ★★ 6. One pizza slice costs 50¢. How much would the whole pizza cost?

Answer: _____

